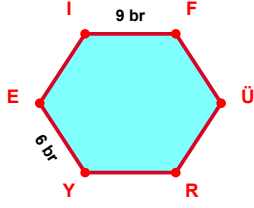
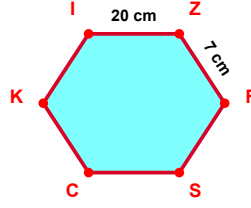


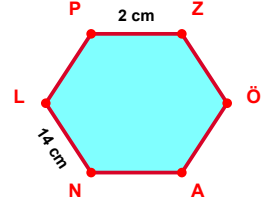
SORU: Aşağıdaki şekillerde verilen, kenar uzunlukları farklarını bulunuz.



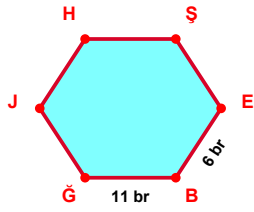
$$|IF| - |YE| = \dots\dots$$



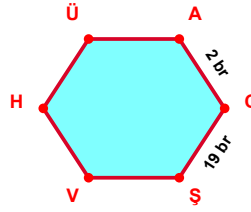
$$|IZ| - |ZF| = \dots\dots$$



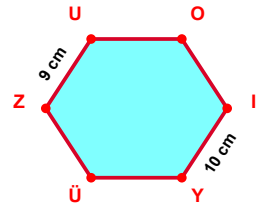
$$|NL| - |PZ| = \dots\dots$$



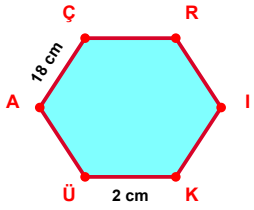
$$|BĞ| - |EB| = \dots\dots$$



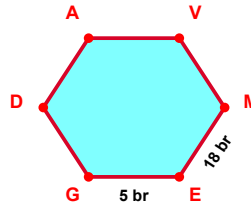
$$|CS| - |AC| = \dots\dots$$



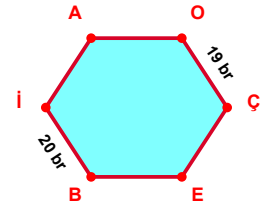
$$|İY| - |ZU| = \dots\dots$$



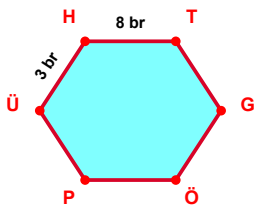
$$|AÇ| - |KÜ| = \dots\dots$$



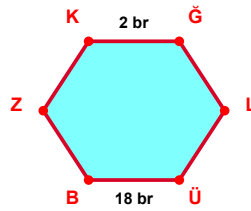
$$|ME| - |EG| = \dots\dots$$



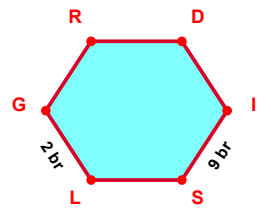
$$|İB| - |OÇ| = \dots\dots$$



$$|HT| - |ÜH| = \dots\dots$$

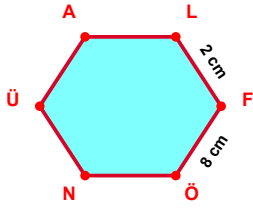


$$|ÜB| - |KĞ| = \dots\dots$$

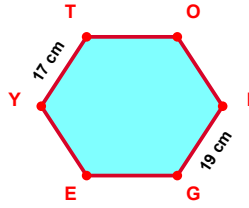


$$|İS| - |LG| = \dots\dots$$

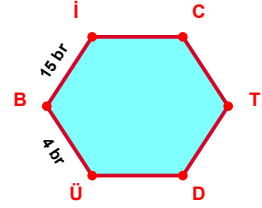
SORU: Aşağıdaki şekillerde verilen, kenar uzunlukları farklarını bulunuz.



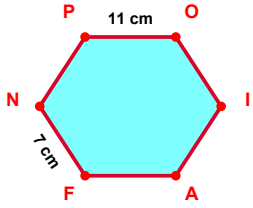
$$|FÖ| - |LF| = \dots\dots$$



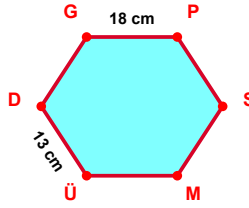
$$|IG| - |YT| = \dots\dots$$



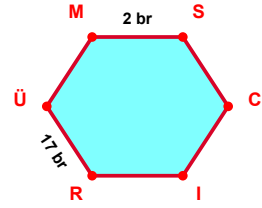
$$|Bİ| - |ÜB| = \dots\dots$$



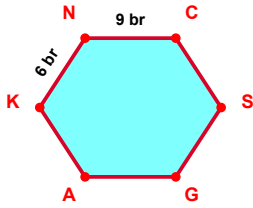
$$|PO| - |FN| = \dots\dots$$



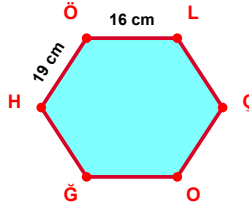
$$|GP| - |ÜD| = \dots\dots$$



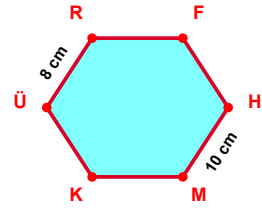
$$|RÜ| - |MS| = \dots\dots$$



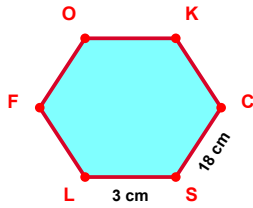
$$|NC| - |KN| = \dots\dots$$



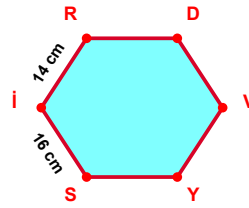
$$|HÖ| - |ÖL| = \dots\dots$$



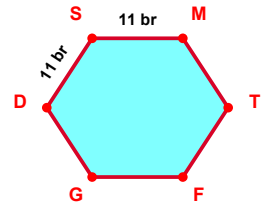
$$|HM| - |ÜR| = \dots\dots$$



$$|CS| - |SL| = \dots\dots$$



$$|Sİ| - |İR| = \dots\dots$$



$$|SM| - |DS| = \dots\dots$$

## SÜREÇ ODAKLI DEĞERLENDİRME ÖLÇEĞİ

Doğru Sayısı: ..... / 24

Öğretmen ilgili kutucuğu işaretler.

Geliştirilmeli (0-8)

İyi (9-14)

Çok İyi (15-20)

Mükemmel (21-24)

☐
☐
☐
☐

Hazırlayan: .....

Bu bölüme sınıfınızın ilgili kazanıma yönelik genel durumuna ilişkin gözlem ve izlenimlerinizi, öğrencilerinizin bu kazanımla ilgili öğrenme eksikliklerini ve bu eksikliklerin giderilmesi amacıyla yaptığınız/yapmayı planladığınız faaliyetleri not edebilirsiniz.

No	Adı - Soyadı	Toplam Puan	Değerlendirme
1			
2			
3			
4			
5			
6			
7			
8			
9			
10			
11			
12			
13			
14			
15			
16			
17			
18			
19			
20			
21			
22			
23			
24			
25			
26			
27			
28			
29			
30			
31			
32			
33			
34			
35			

Hazırlayan: ..... ..